



# Telling Time

Analog:



Digital: 12:00

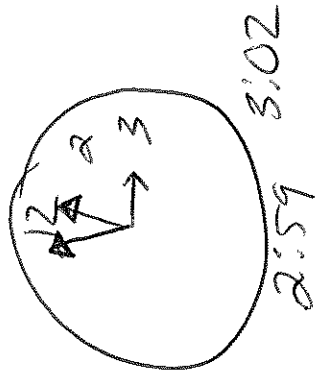
hours 1-12  
mins 00-59



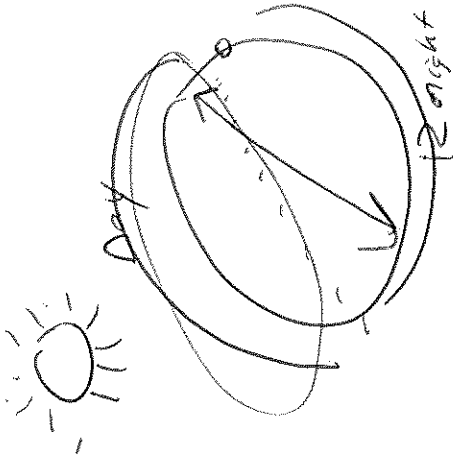
- 24 hrs per day  
= Clock goes around twice

Little hand  
HOOR

Big hand  
MINUTES



2:59 3:02



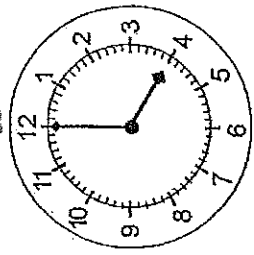
$$\sqrt{49} = 7$$

$$\sqrt{48} \approx 6.9$$

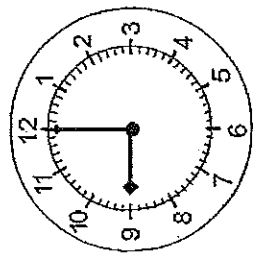
$\sqrt{49} = 7$   
 $\sqrt{48} \approx 6.9$

**Telling Time**  
 Write the Time in Words - Hour / And write the time

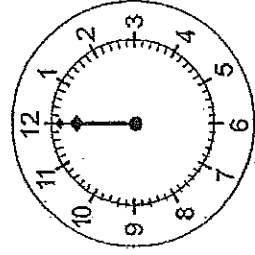
name \_\_\_\_\_



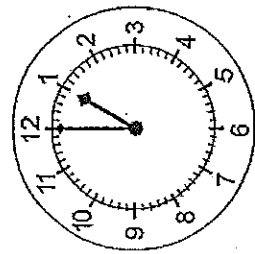
4:00 Four O'Clock



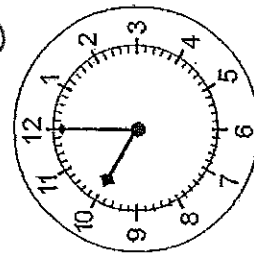
9:00 Nine O'clock



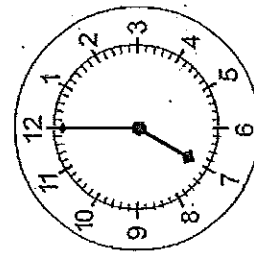
12:00 Twelve O'clock



1:00



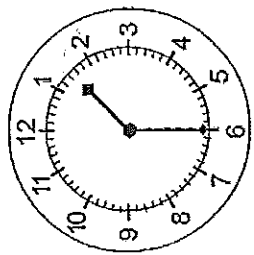
10:00



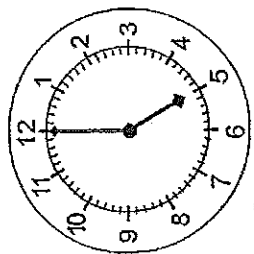
7:00

**Telling Time**  
 Write the Time in Words - Half Hour / And write the time

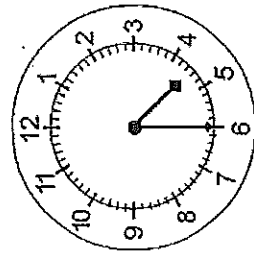
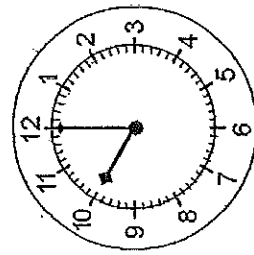
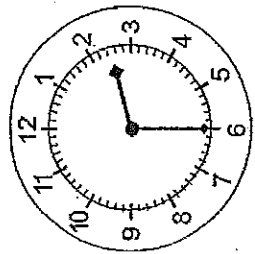
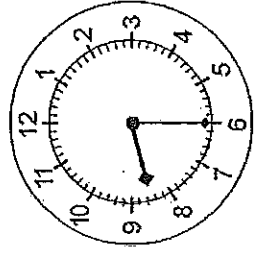
name \_\_\_\_\_



1:30 One Thirty



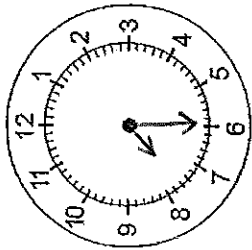
5:00 Five O'clock



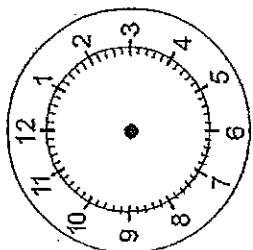
# Telling Time

Digital To Analog - Half Hour

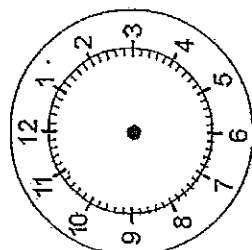
name \_\_\_\_\_



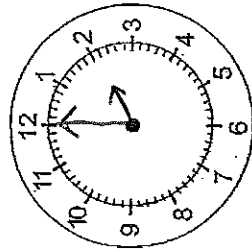
7:30



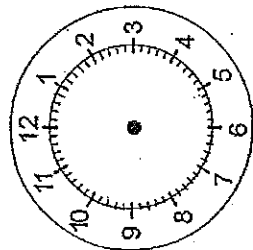
4:00



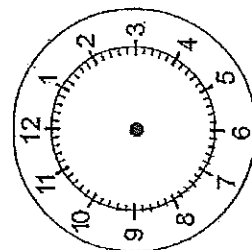
1:30



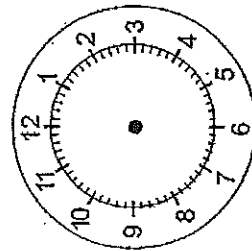
2:00



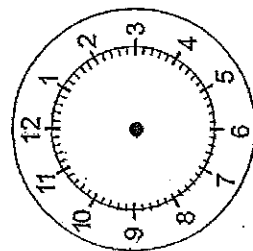
12:30



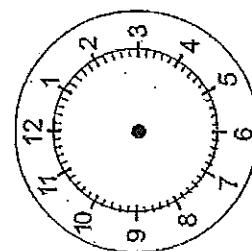
10:30



8:30



5:30

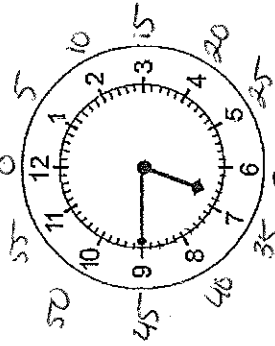


11:00

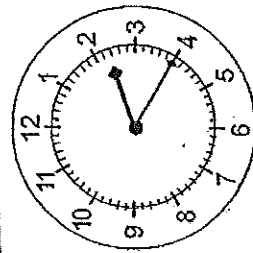
# Telling Time

Write the Time - 5 Minute Intervals

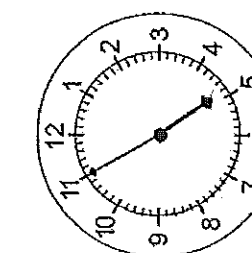
name \_\_\_\_\_



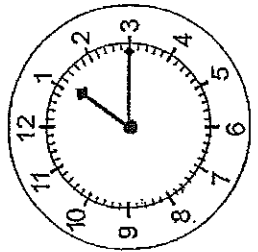
6:45



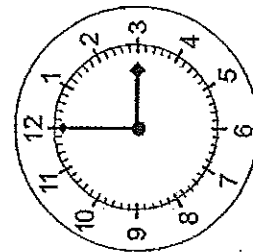
2:20



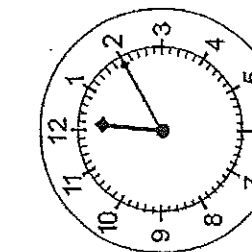
~~4:55~~  
4:55



1:15



3:00



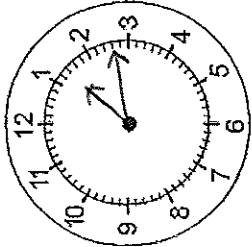
~~12:10~~  
12:10

66

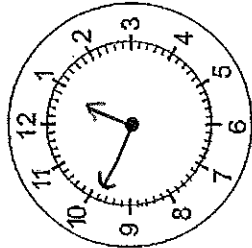
# Telling Time

Digital to Analog - Minute Intervals

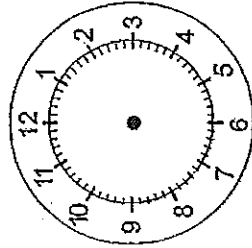
name \_\_\_\_\_



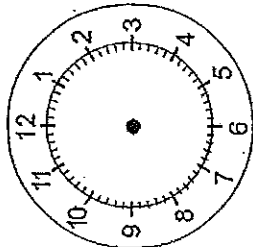
1:13



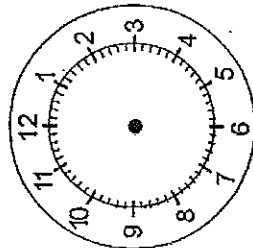
12:49



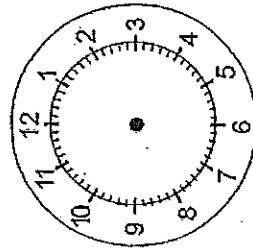
8:29



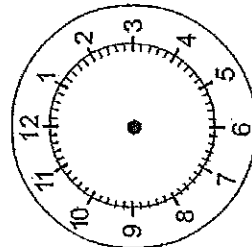
2:45



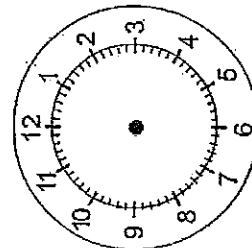
6:21



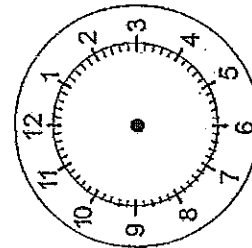
10:59



7:47



2:12



9:09

# MY TV GUIDE

Name Miss. BLAND

TV Show	Start Time	End Time	Duration
My Like Pony! Day of week: Tuesday			
Saved by the Bell! Series. Day of week: Tuesday			
Grey's Anatomy Day of week: Wednesday			
Football! Marathon! (Go Cards + Browns!) Day of week: Sunday			

Total # of hours watching TV: \_\_\_\_\_

time-for-time.com

